

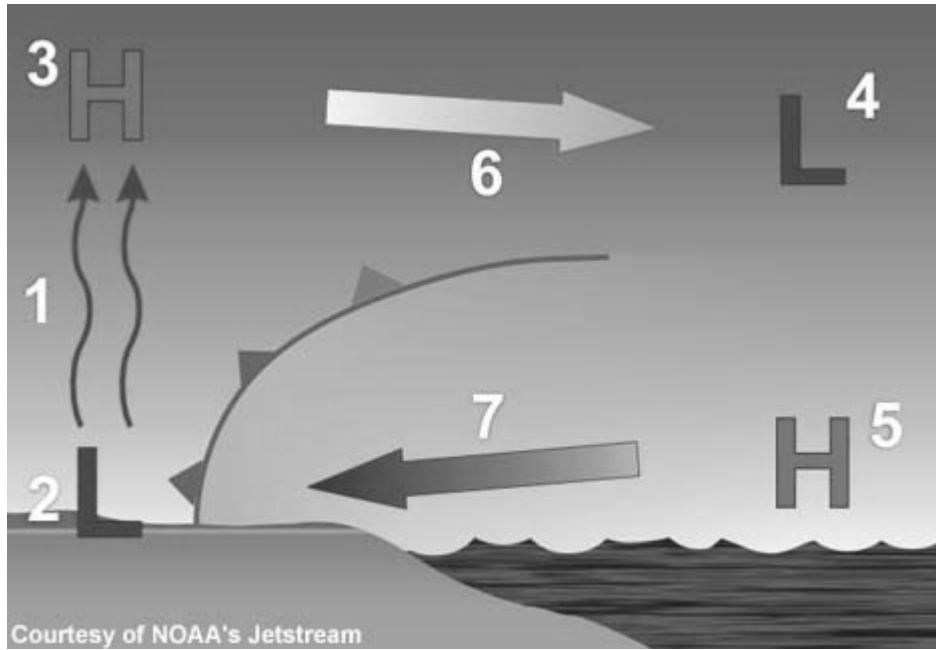
# MiSP Weather — Wind Speed and Direction Worksheet #1 L1-L3

Name \_\_\_\_\_

Date \_\_\_\_\_


## NOTES — SEA AND LAND BREEZES

### Sea Breeze




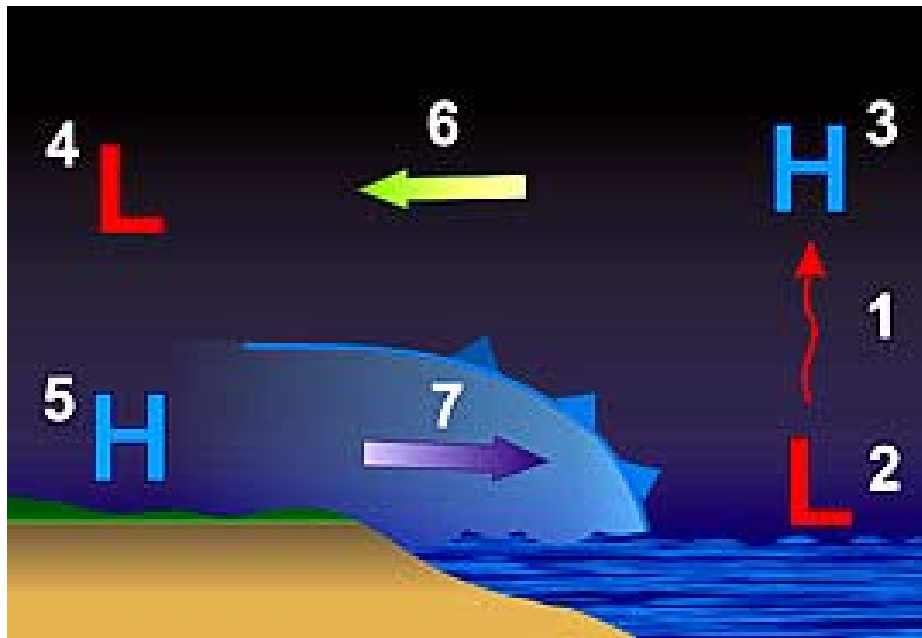
Write a description of what happens at each place indicated by a number in the diagram above.

1. \_\_\_\_\_  
\_\_\_\_\_
2. \_\_\_\_\_  
\_\_\_\_\_
3. \_\_\_\_\_  
\_\_\_\_\_



4. \_\_\_\_\_
- \_\_\_\_\_
5. \_\_\_\_\_
- \_\_\_\_\_
6. \_\_\_\_\_
- \_\_\_\_\_
7. \_\_\_\_\_
- \_\_\_\_\_

**Land Breeze**



Write a description of what happens at each place indicated by a number in the diagram on the previous page.

1. \_\_\_\_\_  
\_\_\_\_\_
2. \_\_\_\_\_  
\_\_\_\_\_
3. \_\_\_\_\_  
\_\_\_\_\_
4. \_\_\_\_\_  
\_\_\_\_\_
5. \_\_\_\_\_  
\_\_\_\_\_
6. \_\_\_\_\_  
\_\_\_\_\_
7. \_\_\_\_\_  
\_\_\_\_\_

